

YOUNG EDUCATION SERVICES
GREENWICH
Y2

Name: _____ **Date: Spring Term Pack 8**

Prepared By: L. Potter _____

READING:- _____

COMPREHENSION:- KS1 Assessments Test papers p2-p7 The Dog and the Bone & p9-p12 all About Dogs & p13-p15 Looking after a pet dog.

MATHS:- Essential Assessment KS1 Test 1 p27,p28 &p29.

Test 2 p30-p37 _____

Books and materials to return: _____

Teachers signature: _____

This homework given in date: _____

Teachers signature: _____

This homework returned date: _____

YOUNG EDUCATION SERVICES
GREENWICH
Y2

Name: _____ **Date: Spring Term Pack 8**

Prepared By: L. Potter _____

READING:- _____

COMPREHENSION:- KS1 Assessments Test papers p2-p7 The Dog and the Bone & p9-p12 all About Dogs & p13-p15 Looking after a pet dog.

MATHS:- Essential Assessment KS1 Test 1 p27,p28 &p29.

Test 2 p30-p37 _____

Books and materials to return: _____

Teachers signature: _____

This homework given in date: _____

Teachers signature: _____

This homework returned date: _____



187 GREENWICH HIGH ROAD
GREENWICH SE10 8JA
TEL: 020 8858 9180
FAX: 020 8858 9720
LIN POTTER B. Ed Dip Maths
MANAGING DIRECTOR

Parent's Comment Sheet for Classwork / Homework

CHILD'S NAME _____

Monday _____

Tuesday _____

Wednesday _____

Thursday _____

Friday _____

Saturday _____

Sunday _____

Parent's Signature _____

The Dog and The Bone

Once upon a time there was an old dog that was greedy and very unkind. He was walking home one day when, all of a sudden, he came to a butcher's shop. The dog stopped and poked his nose through the door to get a closer smell of all those delicious meats. "Mmm," he thought. He loved the smell!



Practice Questions

A What type of dog was he? Circle the word.

clever


greedy

kind

brave

B Why did the dog stop outside the butcher's shop?

After a while, the dog went into the butcher's shop and looked hungrily at all the different meats and tasty bones on the counter. There were lots of customers busy buying. The dog's tummy rumbled and he realised it was nearly dinner time. He began to feel extremely hungry.



- 1 What was the dog looking at on the counter?

(1 mark)

☐ Q1

- 2 How did the dog feel?

(1 mark)

☐ Q2

Turn over

The dog could not help himself and when the butcher was not looking, he greedily snatched the biggest bone he could see.

The dog ran straight out of the shop and carried on running home with his new bone. He was very pleased with himself and he held the bone tight between his teeth so he would not lose it.



3 What did the dog do when the butcher was not looking? (1 mark)

Tick your answer.

He snatched a bone. ☐

He licked a piece of meat. ☐

He barked loudly. ☐

He wagged his tail. ☐

4 Why did the dog hold the bone between his teeth? (1 mark)

As the dog ran towards home, he came to a large stream. He was worried and did not know how to get across. Then, out of the corner of his eye, he noticed an old bridge.

The dog, still holding on tightly to his bone, decided to cross the bridge.

Half way over the bridge, the dog stopped and looked at his reflection in the water below him. All he could see was a dog holding a tasty, big bone. Being such a greedy, foolish dog, he wanted the bone the other dog was holding, so he growled and snapped at the dog in the water.



- 5 Write down two things that the dog saw as he was walking. (2 marks)

☐ Q5

a) _____

b) _____

- 6 Why did the dog growl at the water?

(1 mark)

☐ Q6

Turn over

As he did this, he opened his mouth wide to show his sharp teeth, but immediately the bone fell from his mouth into the stream below him. The dog watched as the bone sank to the bottom. He could not reach it – it was lost forever.



"Oh no!" cried the dog. "My beautiful, tasty bone!" and he began to cry.

- 7 What did the dog do when the bone fell into the water? (1 mark) ☐ Q7

- 8 Why do you think the dog began to cry? (1 mark) ☐ Q8
Tick your answer.

He was lonely. ☐

He did not like water. ☐

He could not reach the bone. ☐

He was lost. ☐

- 9 Tick two words which describe the lost bone. (2 marks) ☐ Q9

beautiful ☐

juicy ☐


tasty ☐

big ☐

The dog was very sad and he wished that he had not tried to be greedy and have two bones, because now he was left with nothing.

Slowly and miserably, the hungry dog walked home, his tail down and his face covered in tears.

The dog learnt his lesson on that bridge and from that day on, he was never greedy again.



- 10 How do we know the dog was upset as he walked home? (2 marks)

☐
Q10

- 11 What do you think the moral of the story is?
Tick your answer.

(1 mark)

☐
Q11

Be happy with what you have.

☐

Don't walk over a bridge.

☐

Never eat meat.

☐

Stay away from water.

☐

Turn over

All About Dogs

In the first part of this booklet, you read a story called "The Dog and the Bone", about a dog that was greedy and unkind.

In the next part of the booklet, you are going to read about dogs. There is some information about types of dogs and a guide on how to keep them as pets.

Practice Questions

- A What will the next part of the booklet tell you about?
Circle your answer.

bones

dogs

fables

cats

- B What are you going to read in the next part of the booklet?
Tick two things.

Information ☐

A story ☐

A recipe ☐






A-guide ☐

A poem ☐

A letter ☐

Turn over

Dogs are very clever animals and they can make excellent pets. There are many different breeds of dogs. The table below shows some of them.

<p>Labradors</p> 	<p>This is the most popular type of dog in the world today. Labradors can be one of three colours – yellow, black or chocolate.</p>
<p>Terriers</p> 	<p>These are lively little dogs.</p>
<p>Chinese Crested</p> 	<p>Some Chinese Crested are born with no hair.</p>
<p>Chihuahuas</p> 	<p>These dogs come from Mexico. They are small and easy to look after.</p>
<p>Shar Peis</p> 	<p>These dogs come from China. They are unusual, because they have a blue tongue.</p>

- 12 What does the table show?
Tick your answer.

(1 mark)

Where dogs live.

☐

How old dogs are.

☐

Breeds of dogs.

☐

Breeds of cats.

☐

- 13 Which dogs come from Mexico?
Circle your answer.

(1 mark)

☐

Q13

Labradors

Chihuahuas

Terriers

Shar Peis

- 14 What three colours do Labradors come in?

(2 marks)

☐

Q14

- a) _____
- b) _____
- c) _____

- 15 Which is the most popular type of dog in the world today?
Tick your answer.

(1 mark)

☐

Q15

Terriers

☐


Chinese Crested

☐

Shar Peis

☐



Labradors

☐

Turn over

One of the easiest ways to find out the breed of a dog is by looking at the shape of the face. Some dogs have very pointed faces, but others are more rounded. Another way to identify a breed of dog is by looking at the ears. Some dogs have pointed ears that stick up, but others have ears that droop down.

If you are choosing a dog for a pet, it is a good idea to visit a dog show, so you can see lots of dogs and talk to their owners.



- 16 Tick two ways, mentioned above, that you can tell a dog's breed. (1 mark)

By its size.

☐

By its colour.

☐

By the shape of its face.

☐

By its ears.

☐

- 17 What should you do if you are choosing a dog as a pet? (2 marks)

Looking After a Pet Dog

Feeding

Dogs will eat both meat and vegetables. There are lots of different dog foods that you can buy in the shops, markets and pet stores.

You must remember not to give your pet dog too much food, as they will become fat and unhealthy.

Dogs should drink water every day. This should be in a clean bowl.

- 18 Tick three places where you can buy dog food.

(2 marks)

☐

Q18

farms

☐

markets

☐

shops

☐

pet stores

☐

garden centres

☐

newsagents

☐

- 19 Why is it a bad idea to give your dog too much food?

(1 mark)

☐

Q19

- 20 Why do you think the water should be in a clean bowl?


(1 mark)

☐

Q20

Turn over

In the Home



A pet dog will like to spend some time in the garden. There should be a fence around the garden so that the dog cannot run away. Some dogs can jump very well, so the fence should be quite high.

Dogs like sleeping in a comfy bed. They will need to have their own basket.

- 21 Where do dogs like sleeping?
Circle your answer.

(1 mark)

☐
Q21

In a comfy bed.

In a box.

On someone's knee.

Under the stairs.

- 22 Why should a dog's garden have a fence?

(1 mark)

☐
Q22

23 Thinking of what you have read in this booklet, do you think that the dog from the story "The Dog and the Bone" would make a good pet? Circle your answer.

Yes

No

Why? Give two reasons

(2 marks)


☐ Q23

a) _____

b) _____

END OF TEST

27



30p



24p



32p

Complete this list –

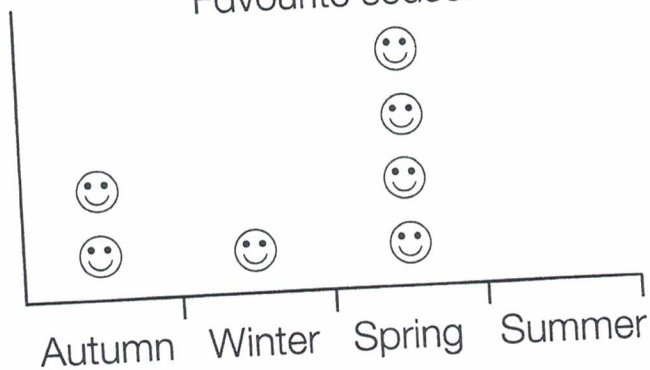
ITEM	PRICE
CHOCOLATE	32p
CRISPS	

28







means 1 child

Favourite season



Two children like the summer.
Show this on the pictogram.

- 29 This table shows the favourite fruits of a class

Favourite fruits		Number of children
Apple		5
Banana		6
Orange		4
Strawberry		12

- A. More children liked strawberries than apples.

How many more?

Answer =

- B. How many children are in the class?

Answer =

- 30 These are the scores in a house competition

House	Score
Blues	12
Reds	8
Yellows	13
Greens	7

- A. Which house came second?

- B. Which house had 8 points?

- C. How many more points did yellows have than greens?

Key Stage 1 Assessment

Test 2

1 Write the numbers in order - smallest first

31

24

50

13

42

85

2 Fill in the missing numbers

A.

6

+

=

12

B.

13

-

=

9

C.

+

8

=

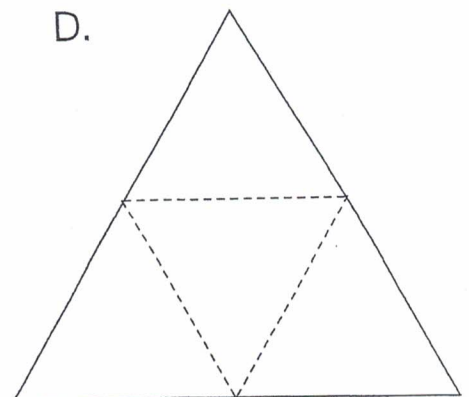
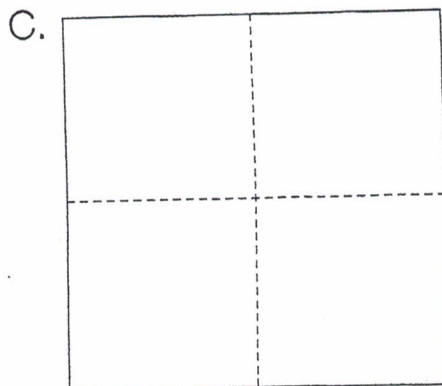
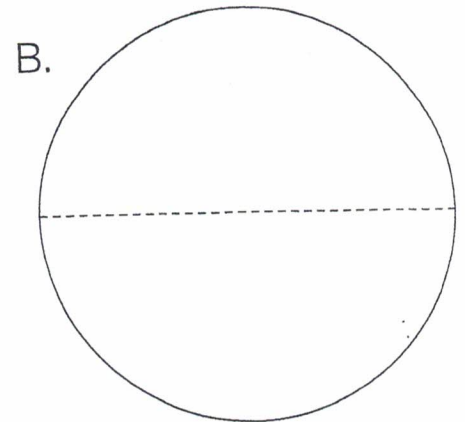
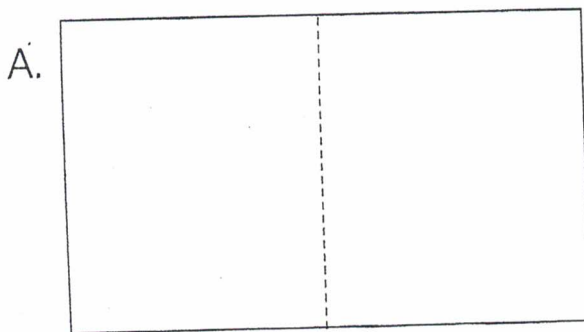
14

3 Put the numbers in the correct list

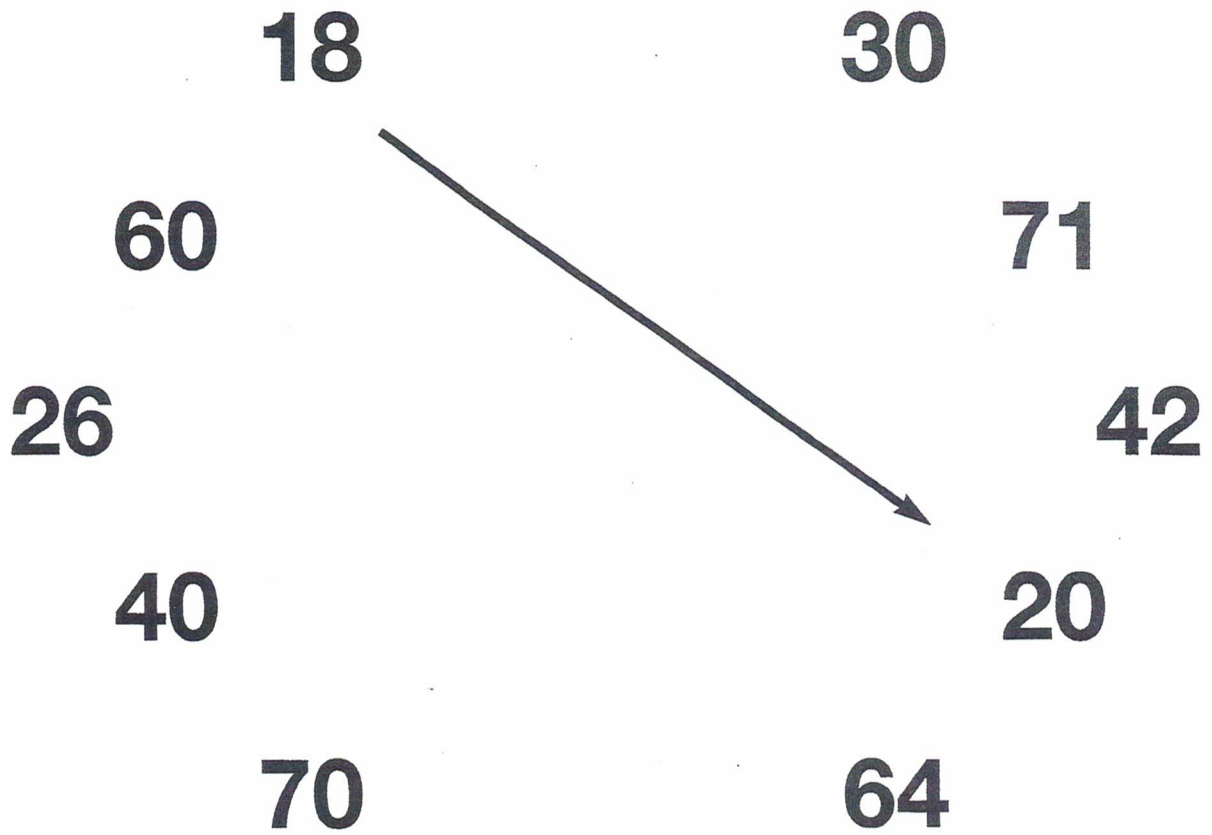
17 14 8 2 9 13

Odd Numbers	Even Numbers

4 Shade in half of each shape



5 To the nearest 10



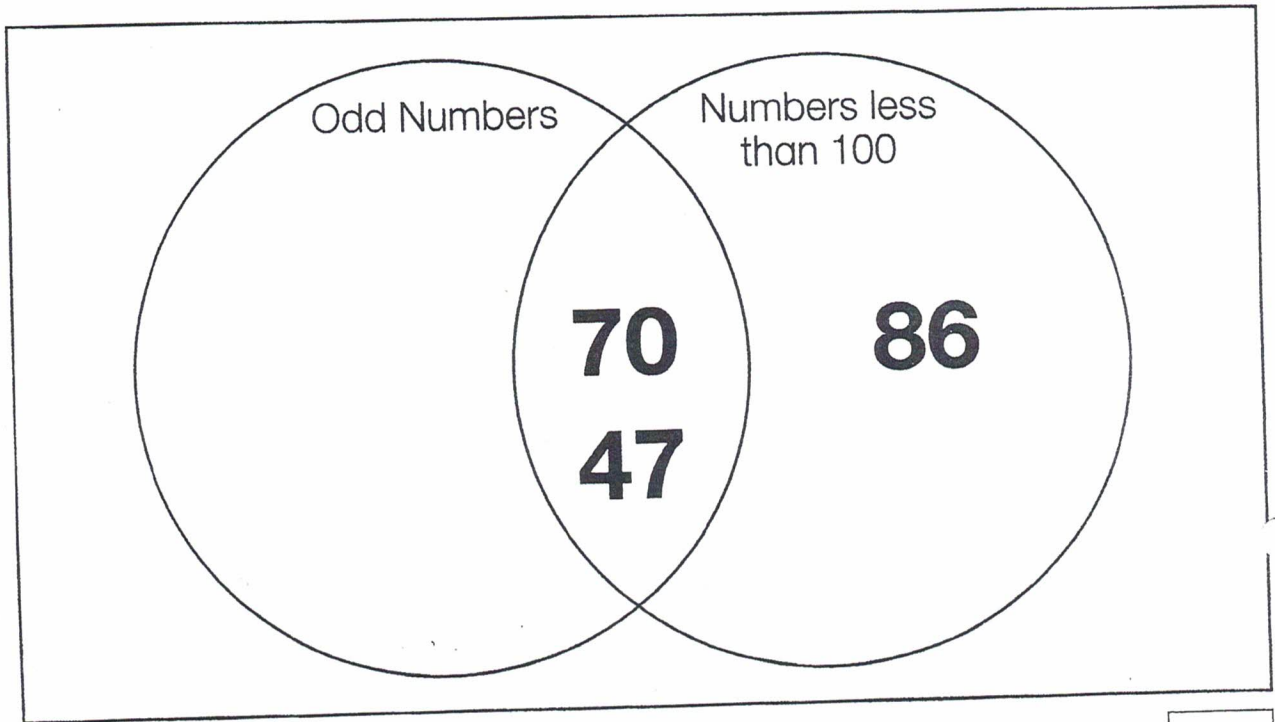
6 Fill in the missing numbers

A. 2, , 6, 8

B. 14, 12, , 8


C. 6, 9, 12,

- 7 Which number is in the wrong place?



Answer =

- 8 7 pigeons are sitting on the roof. 5 more land. How many pigeons are on the roof altogether?



Answer =

- 9 Write the numbers that can be exactly divided by 5 in the box

20 31 52 45 75 58

- 10 Put a tick (✓) if the sum is correct.

Put a cross (✗) if the sum is wrong.

A. $36 + 44 = 80$

☐

B.
$$\begin{array}{r} 91 \\ -35 \\ \hline 64 \end{array}$$

☐

C. $20 + 30 + 44 = 94$

☐




11 Which of these calculator displays shows 'three pounds seven pence'.


☐

☐

☐

12 Which thermometer shows 3° below zero?


☐

☐

☐

13 A.

$$34 - 18$$

B.

$$5 \overline{)48}$$

- 14** Which sum gives the answer 5r3?

$$3 \overline{)17}$$

$$18 \div 3$$

$$3 \overline{)15}$$

$$23 \div 4$$

Answer =

- 15** How many figures can be bought for £10?



Answer =