

### Activity A The Beautiful Baby

1. the baby's uncle
2. her new baseball cap
3. nasty, smelly things/she couldn't care less/  
didn't like them
4. waggled his fingers
5. jiggled it on her lap
6. jealous
7. a) jiggling  
b) cute  
c) pathetic

### Activity A Tiger, Tiger

1. habitat
2. male  
by the stripe pattern
4. paws
5. because it hunts at night
6. a) Did you know?  
b) Appearance
7. to separate different types of information

### Activity 1 Dinosaur Pox

1. purple and green blotches
2. little, red, glinting  
2 marks for three, 1 mark for two
3. (thick) tree trunks
4. very strange
5. the moment she woke up
6. pushed it with her snout
7. grumpy
8. No E.g. *she was turned into a dinosaur/  
the author made her very grumpy/always  
complaining/never satisfied*

### Activity 2 The Golden Apple

1. disagreement
2. she hadn't been invited to the wedding
3. Aphrodite, Athena, Hera  
2 marks for three correct, 1 mark for two correct
4. Mount Olympus
5. accept any answer that indicates emphasis
6. to make someone else (Paris) do the judging
7. she was pleased she had caused trouble;  
she could see that there was going to be a lot  
more trouble  
No mark for 'happy'; 2 marks for both answers
8. yes, because they were pretty/he was flattered  
or  
no, because two of them would be angry  
award mark for any logical answer

### Activity 3 The Three Farmers

1. Bunce
2. he ate three chickens and dumplings for  
breakfast, lunch and supper
3. a pencil
4. that they were mean and crooks
5. diet/tummy-ache
6. didn't eat anything
7. Bean because he is the cleverest


### Activity 4 Belling the Cat

1. because something had to be done/they were  
worried about the cat  
*do not accept 'to bell the cat'*
2. because otherwise the cat will kill them all
3. they could hear him coming; could escape
4. 'crossly' or 'loudly'  
*anything appropriate*
5. stage directions
6. no, they were all too scared or  
yes, they had to or the cat would kill them all  
*award mark for logical reason*
7. Answers will vary.  
*award 1 mark for any plausible/logical reason.  
Do not give credit for answers that simply state  
'I think it was a good/the best excuse'.*

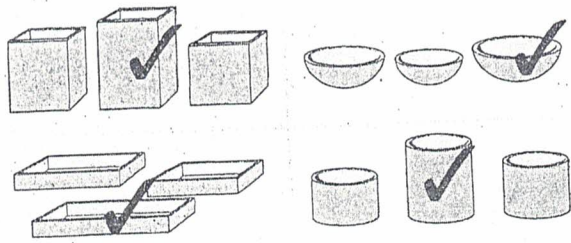
1

Comparing capacity and volume

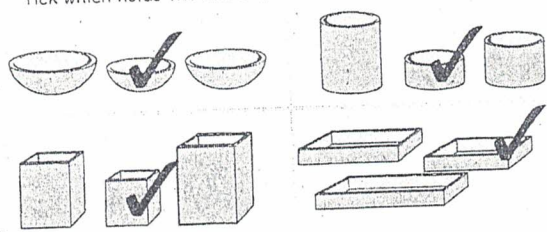
Which glass holds the most?  
Tick it.



Tick which holds the most.



Tick which holds the least.




90

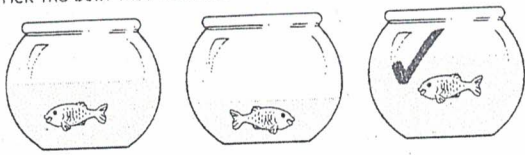
2

Comparing capacity and volume

Which bottle has most liquid in it?  
Tick the bottle.




Tick the bowl that has most water.



Tick two bowls that are the same size.



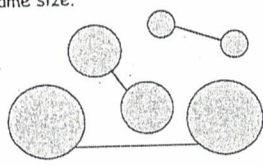
Tick the bottle that has least liquid.



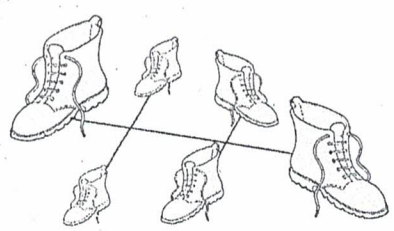
91

Comparing size

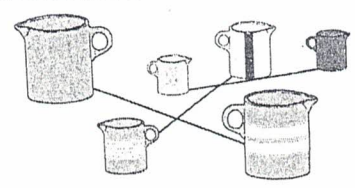
Join balls which are the same size.



Join boots which are the same size.




Join jugs which are the same size.



92

Shape properties

Look at the shapes.  
Tick all the shapes that have curved sides.



Tick all the shapes that have straight sides.



Tick all the shapes that have corners.



Tick all the shapes that have curved faces.



Tick all the shapes that have flat faces.



93



1


## Shapes

Look at the shapes.


Tick all the four-sided shapes.




Tick all the three-sided shapes.



Tick all the squares.



Tick all the triangles.



94

2

## Shapes

Look at this shape.




One of these shapes is exactly the same.

Tick it.



Tick the shape that is exactly the same shape and size.

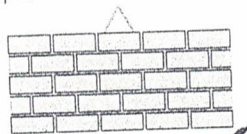


95

3

## Shapes

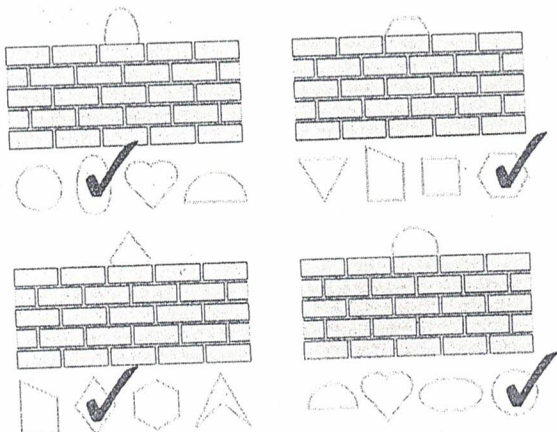
A shape is peeping over the top of a wall.



Tick which shape it is.



Tick to show which shape is peeping over.



96

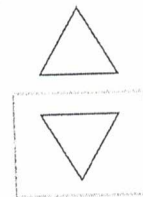
1

## Position


Look at the triangle.

What does it look like upside down?

Draw it in the box.



Draw what each letter looks like upside down.



97

2

# Position

Look at the two pictures of a coin.  
Tick what has happened.



flipped over  
turned upside down

Tick what has happened.



flipped over  
turned upside down



flipped over  
turned upside down



flipped over  
turned upside down



flipped over  
turned upside down

98


3

# Position


Draw a cross in the middle square.




Colour the last elephant.




Colour the first elephant.




Colour the middle elephant.



Colour the third elephant.



Colour the second elephant.




99

4

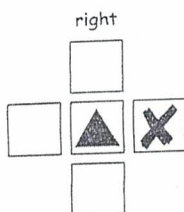
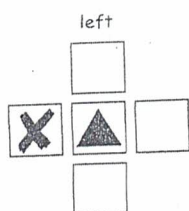

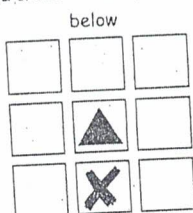
# Position

Look at the black square.  
Draw a cross in the square above it.



Look at the triangle.

Draw a cross in the square which is:



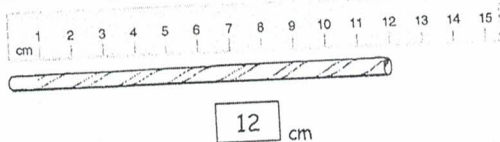
100

1

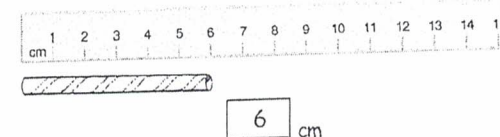

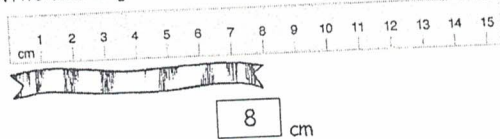
# Measuring

How long is the straw?

Write the length in the box.



Write each length in centimetres.



101

# Tables

Who has most stamps?

Michelle

Jon	4 stamps
Michelle	6 stamps
Alex	3 stamps
Lucy	1 stamp

Who scored most marks?

Tom

Who scored 4 marks?

Nita

Ben	6 marks
Nita	4 marks
Tom	7 marks
Emma	3 marks

Who had 6 sweets?

Fran

Who had fewest sweets?

Nigel

Lisa	12 sweets
Jenny	7 sweets
Fran	6 sweets
Nigel	2 sweets

On which day were 44 labels collected?

Thursday

How many labels were collected on Tuesday?

25

Monday	20 labels
Tuesday	25 labels
Wednesday	50 labels
Thursday	44 labels
Friday	74 labels

On which day was £4 collected?

Friday

How much was collected on Wednesday?

£7


Monday	£8
Tuesday	£12
Wednesday	£7
Thursday	£8
Friday	£4

114

# Price charts

How much is the ball?

60p

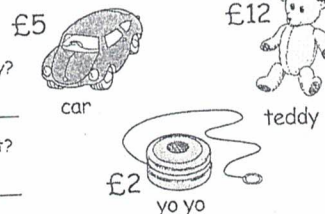


Which is the cheapest toy?

yo yo

Which toy costs the most?

teddy




Lollies

Which lolly costs 99p?

orange

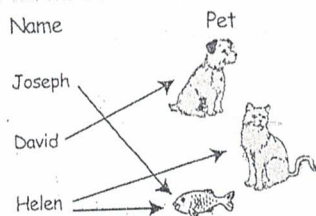
How much is the lime lolly?

80p

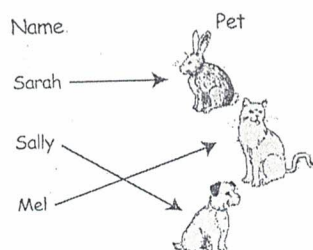


115

# Mapping



Who has two pets? Helen



Who has a dog? Sally

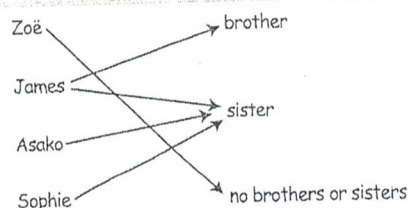
What is Mel's pet? cat

Who owns the rabbit? Sarah

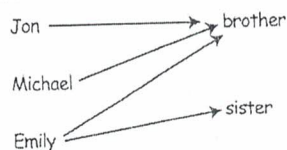
How many pets are there? 3

116

# Mapping



Who has a brother and a sister? James



Charlotte

Who has no brothers or sisters? Charlotte

Who has a brother and a sister? Emily

What does Jon have? a brother

What does Michael have? a brother


How many children were asked about brothers and sisters? 4

117




1

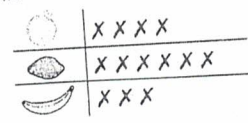
# Tallies



Another robin was seen.  
Show this on the chart.



Draw crosses to match the fruit. X

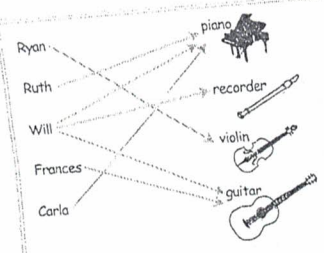


How many apples? 3  
 How many lemons? 6  
 How many bananas? 4  
 How much fruit altogether? 13  
 Which fruit is there most of? lemons

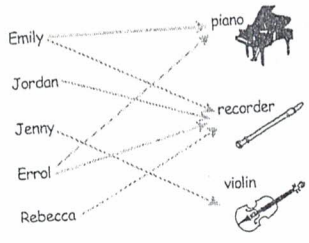
119

3

# Mapping



How many children play the piano? 3





Who plays the violin? Jenny  
 How many children play the piano? 2  
 How many children play the recorder? 4  
 What does Jordan play? recorder  
 What does Rebecca play? recorder  
 How many children play instruments? 5

118

2

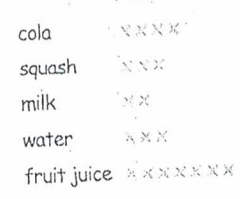
# Tallies

## Favourite rolls



Which roll was the most popular? egg

## Favourite cold drinks

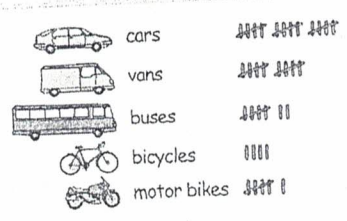


How many liked milk? 2  
 How many liked squash? 4  
 How many liked cola? 5  
 Which drink was most popular? fruit juice  
 Which drink was least favourite? milk  
 How many people were asked about favourite drinks? 19

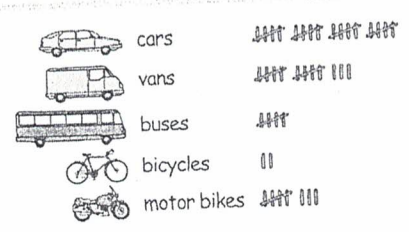
120

3

# Tallies



How many buses were seen? 2



How many buses were seen? 2  
 How many vans were seen? 3  
 How many bicycles were seen? 1  
 How many buses and vans were seen? 5  
 How many more motor bikes than bicycles were seen? 0  
 Were there more vans or motor bikes? vans

121

139